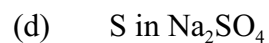
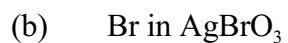
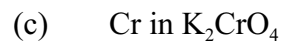
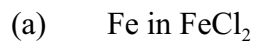
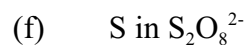
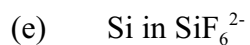


Calculate the charge of the given element in each of the following compounds:



Calculate the charge of the given element in each of the following polyatomic ions:



Calculate the oxidation number of the given element in each of the following:

